



American Government-Part I


IDENTIFYING KEY TERMS: Match each item with the correct statement below. You will use all of the terms.

- a. Majority
- b. Bill of Rights
- c. Democracy
- d. Consent of the governed
- e. Federal Government

1. A _____ is a term used in the lawmaking process, it means one over half.
 2. A _____ is one in which powers are divided between a central government and several local governments.
 3. The First 10 Amendments to the Constitution are called the _____.
 4. A _____ is a government where the people rule.
 5. The _____ means that we allow ourselves to be represented by elected officials.
-

A Cup of Tea

Ann had a tea party. She had all her dolls come. She gave each doll a cookie. She gave each doll some tea. Ann helped each doll eat her cookie. Ann loved a good tea party!



1. Who was coming to Ann's tea party?

- a. all of her friends
- b. all of her pets
- c. all of her dolls

2. What did she give each doll?

- a. a cookie and tea
- b. a cookie and milk
- c. cake and tea

3. Why does Ann love her tea parties?

- a. She gets to eat all the cookies.
- b. She loves playing with her friends.
- c. She loves to play with her tea set.

✓ + ")

Something extra: In the space below draw and color a card asking someone special to come to a tea party. Be sure to tell when and where the party will be!

I am having a tea party it is at 3:00. it is going to be at my home.

Personal Budget Web Quest

3

PART A: Find a House

1. Click Here! (www.century21.com) And then pick a house.
2. Address of house you picked:

3. Fill out the following table and do the calculations:

Total Price of house you picked	a.
Monthly payment (on website)	b.
Yearly payment (line b * 12)	c.
Yearly Income needed (line c divided by .28)	d.

PART B: Find a Car

1. Find a car. Click Here! (www.autoweb.com)

2. Describe your car here:

3. Fill out the following table and do the calculations:

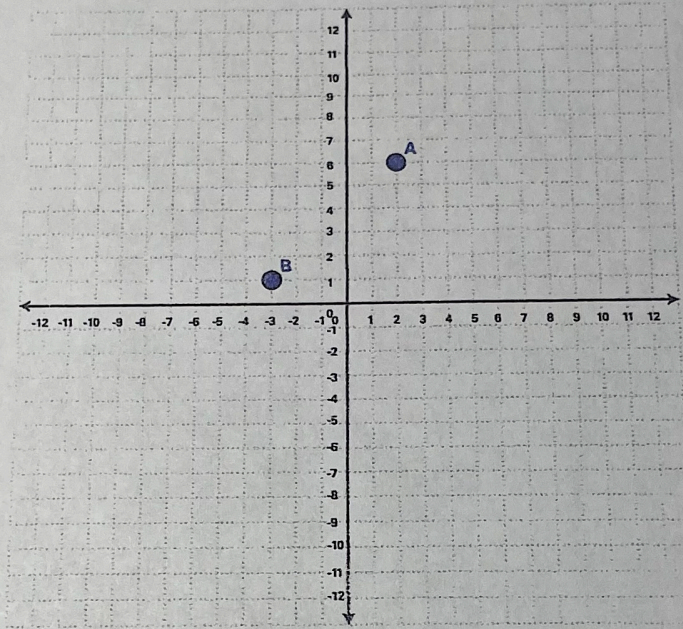
Total Price of car you picked	a.
Monthly payment <u>Click Here!</u> http://www.autobytel.com/car-financing/car-calculators/ (Use \$0 down, 6% sales tax, 6% interest rate and find the monthly payment for 60 months)	b.
Yearly payment (line b * 12)	c.
Yearly Income needed (line c divided by .12)	d.

TASK
4

Name _____

Building a New Playground

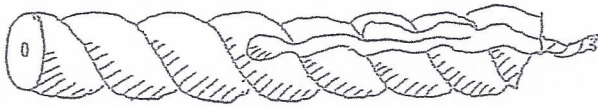
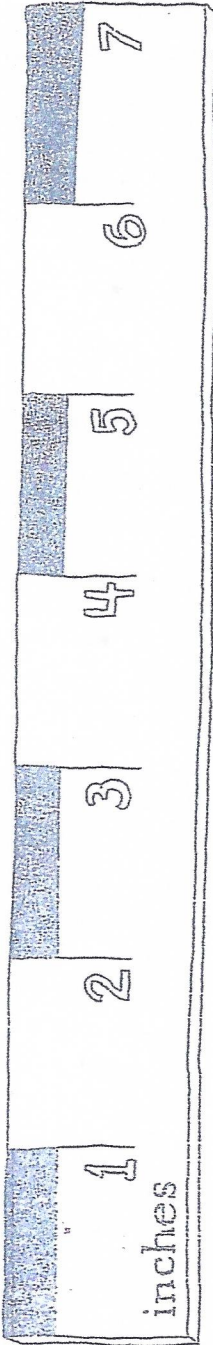
The City Planning Commission is considering building a new playground. They would like the playground to be equidistant from the two elementary schools, represented by points A and B in the coordinate grid that is shown.

PART A

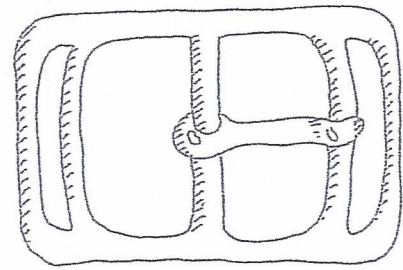
- Determine at least three possible locations for the park that are equidistant from points A and B. Explain how you know that all three possible locations are equidistant from the elementary schools.
- Make a conjecture about the location of all points that are equidistant from A and B. Prove this conjecture.




How long is it?



about 3 inches




about 2 inches



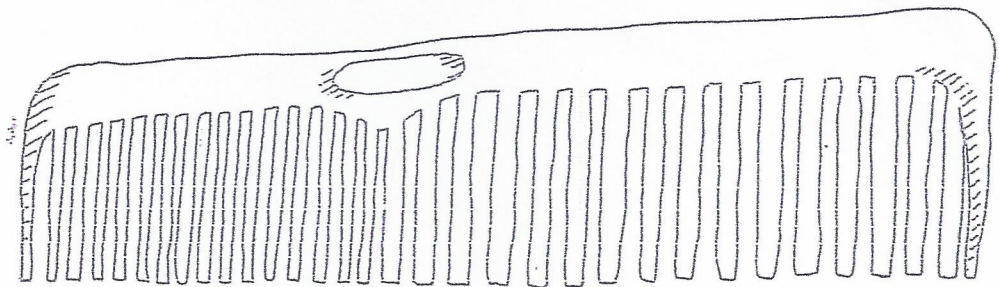
about 1 inches




about 3 inches



about 4 inches



about 5 inches



about 7 inches

COVER STORY: CHINA CHALLENGE, PP. 10-15

Decide whether each sentence is true, false, or an opinion. Write your answer on the blank line provided.

- _____ 6. Mao Zedong was the first leader of Communist China.
- _____ 7. China has no right to censor its people's use of the Internet.
- _____ 8. China's judicial branch is independent of the Communist Party.
- _____ 9. China has a robust and rapidly expanding economy.
- _____ 10. A Chinese human rights activist won the 2010 Nobel Peace Prize.

ETHICS ACTIVITY 3

Name _____

Date _____

Is This Really a Business Expense?

Kate Feldman owns a computer consulting business. Each year she must report the amount of revenue and expenses involved in operating the firm. She must pay federal income tax on the amount by which revenues exceed expenses.

Instructions

Use the three-step checklist to determine whether or not the following situations demonstrate ethical behavior.

Situation 1

Ms. Feldman often makes personal long-distance phone calls from her office. She charges these calls to the business account.

1. *Is the action illegal?*

2. *Does the action violate company or professional standards?*

3. *Who is affected, and how, by the action?*
